



### Key Info

Sara goes shopping.


She spends **half** of her money on a dress.

She spends **two-thirds** of her remaining money on some jewellery.

She has **£6 left**.

**How much** money did she have **at the start**?





# Visual

£




£



£6








Answer

£36



£18



£6





## WS Reversing puzzles

- 1 Sara goes shopping.  
She spends **half** of her money on a dress.  
She spends **two-thirds** of her remaining money on some jewelry.  
She has **£6 left**.

How much money did she have **at the start**?

.....

.....

.....

Answer £ ..... (4 marks)

- 2 John goes shopping.  
He spends **one-third** of his money on a shirt.  
He spends **three-quarters** of his remaining money on some trainers.  
He has **£5 left**.

How much money did he have **at the start**?

.....

.....

.....

Answer £ ..... (4 marks)

- 3 Camilla goes shopping.  
She spends **two-thirds** of her money on some shoes.  
She spends **half** of her remaining money on a present.  
She has **£20 left**.

How much money did she have **at the start**?

.....

.....

.....

Answer £ ..... (4 marks)